


objective #2

Complete the following tasks using only the GEOTool.

Name_____

Copy segment AB



Describe the process of your construction. (Labeling points and lines of picture may assist you in this task.)

What real-life situations could you see this construction have true application? How?


bisect segment AB



Describe the process of your construction. (Labeling points and lines of picture may assist you in this task.)

What real-life situations could you see this construction have true application? How?


Construct a line CD
perpendicular to segment AB



Describe the process of your construction. (Labeling points and lines of picture may assist you in this task.)

What real-life situations could you see this construction have true application? How?

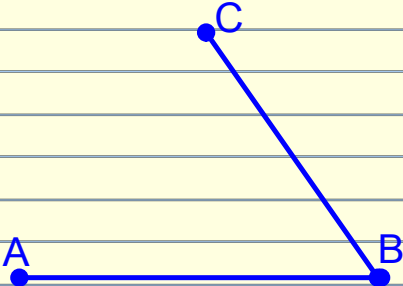
Construct a line CD
perpendicular to segment AB



Describe the process of your construction. (Labeling points and lines of picture may assist you in this task.)

What real-life situations could you see this construction have true application? How?

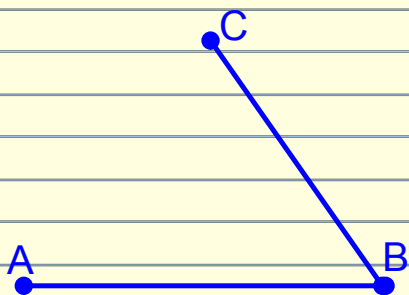
Copy Angle ABC



Describe the process of your construction. (Labeling points and lines of picture may assist you in this task.)

What real-life situations could you see this construction have true application? How?

bisect Angle ABC



Describe the process of your construction. (Labeling points and lines of picture may assist you in this task.)

What real-life situations could you see this construction have true application? How?